








Tuesday Maths-Answers






    
Money is what you use to buy things.




p means pence


£ means pound





 
Value = 1p



= 3p

3 ⁺⁺ 
3 lots of 1p

 
Value = 10p

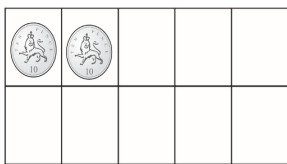


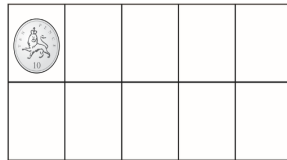




= 40p

4 ⁺⁺ 
4 lots of 10p

Count in 10's to help match the values.



10



10p

50p

70p

40p

£1

30p

90p

60p

80p

20p



What is the value of the coins in the tens frame?



Look Look carefully Is it 1p or 10p

4p

20p

90p

8p



60p

3p

6p

40p

4. Match the words and pictures.



bucket

packet

forest

helmet

rocket

basket